

PAPER

H

SAMPLE



MATHEMATICS

**DO NOT OPEN THIS BOOKLET
UNTIL INSTRUCTED.**

STUDENT'S NAME:

Read the instructions on the **ANSWER SHEET** and fill in your **NAME, SCHOOL** and **OTHER INFORMATION**.

Use a pencil. Do **NOT** use a coloured pencil or a pen.

Rub out any mistakes completely.

You **MUST** record your answers on the **ANSWER SHEET**.

Mark only **ONE** answer for each question.

Your score will be the number of correct answers.

Marks are **NOT** deducted for incorrect answers.

There are **4 MULTIPLE-CHOICE QUESTIONS** (1–4).

Use the information provided to choose the **BEST** answer from the four possible options.

On your **ANSWER SHEET** fill in the oval that matches your answer.

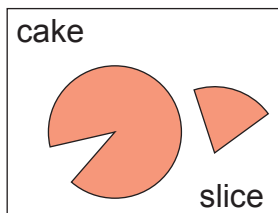
There is **1 FREE-RESPONSE QUESTION** (5).

Write your answer in the boxes provided on the **ANSWER SHEET** and fill in the ovals that match your answer.

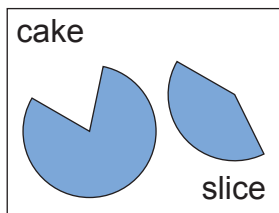
You may use a ruler and spare paper.

A **CALCULATOR** is required.

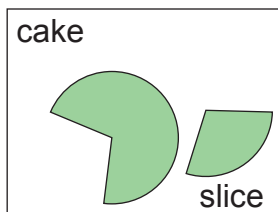
1. In which picture does the slice match the missing part of the cake?



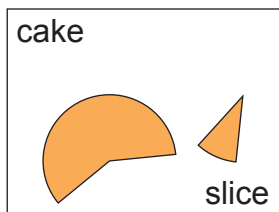
(A)



(B)




(C)



(D)

2. This is a diagram of a triangle.



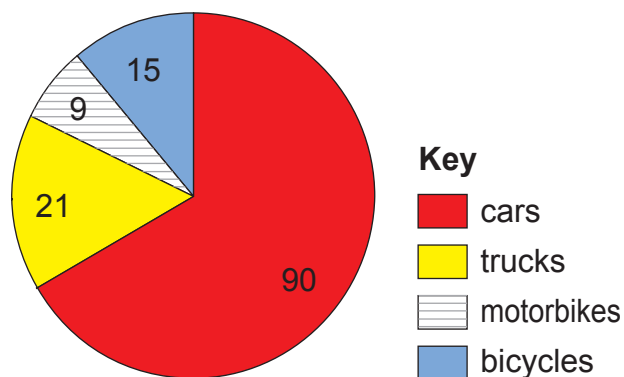
NOT TO SCALE

Which of these **cannot** be values for x and y ?

	x	y
(A)	70	120
(B)	50	120
(C)	70	100
(D)	50	100

3. This is a sector graph (pie graph).

Vehicles Passing the School



What is the angle at the centre for the number of cars passing this school?

- (A) 296°
 (B) 284°
 (C) 257°
 (D) 240°

4. In the toy car shown, the diameters of the back wheels are one-and-a-half times the diameters of the front wheels.



When the car travels one metre, the back wheels go around 6 times.

How many times do the front wheels go around when the car travels one metre?

- (A) 4
 (B) 6
 (C) 9
 (D) 12

QUESTION 5 IS FREE RESPONSE.

Write your answer in the boxes provided on the ANSWER SHEET and fill in the ovals that match your answer.

5. Katya has a set of Russian dolls. The heights of her dolls are shown. They increase by a fixed ratio.



The smallest doll fits in the next larger doll. They both fit inside the next doll. The largest doll shown fits all four of the other dolls inside it.

Katya calculates the height of the doll that can fit exactly 700 dolls inside it, including the dolls shown.

She writes the answer as:

$$1.1603 \times 10^x \text{ mm}$$

What is the value of x ?

END OF PAPER

TO ANSWER THE QUESTIONS

MULTIPLE CHOICE

Questions 1 to 4

Example: $4 + 6 =$

- (A) 2
- (B) 9
- (C) 10
- (D) 24

The answer is 10, so fill in the oval , as shown.

(A) (B) (C) (D)

START

- | | | | | |
|---|---------------------------|---------------------------|---------------------------|---------------------------|
| 1 | <input type="radio"/> (A) | <input type="radio"/> (B) | <input type="radio"/> (C) | <input type="radio"/> (D) |
| 2 | <input type="radio"/> (A) | <input type="radio"/> (B) | <input type="radio"/> (C) | <input type="radio"/> (D) |
| 3 | <input type="radio"/> (A) | <input type="radio"/> (B) | <input type="radio"/> (C) | <input type="radio"/> (D) |
| 4 | <input type="radio"/> (A) | <input type="radio"/> (B) | <input type="radio"/> (C) | <input type="radio"/> (D) |

FREE RESPONSE

Question 5

Example: $6 + 6 =$

- The answer is 12, so WRITE your answer in the boxes.
- Write only ONE digit in each box, as shown, and fill in the correct ovals, as shown.

	1	2
<input type="radio"/> 0	<input type="radio"/> 0	<input type="radio"/> 0
<input type="radio"/> 1	<input checked="" type="radio"/> 1	<input type="radio"/> 1
<input type="radio"/> 2	<input type="radio"/> 2	<input checked="" type="radio"/> 2
<input type="radio"/> 3	<input type="radio"/> 3	<input type="radio"/> 3
<input type="radio"/> 4	<input type="radio"/> 4	<input type="radio"/> 4
<input type="radio"/> 5	<input type="radio"/> 5	<input type="radio"/> 5
<input type="radio"/> 6	<input type="radio"/> 6	<input type="radio"/> 6
<input type="radio"/> 7	<input type="radio"/> 7	<input type="radio"/> 7
<input type="radio"/> 8	<input type="radio"/> 8	<input type="radio"/> 8
<input type="radio"/> 9	<input type="radio"/> 9	<input type="radio"/> 9



USE A PENCIL

DO NOT USE A COLOURED PENCIL OR PEN

SAMPLE

5

<input type="radio"/> 0	<input type="radio"/> 0	<input type="radio"/> 0
<input type="radio"/> 1	<input type="radio"/> 1	<input type="radio"/> 1
<input type="radio"/> 2	<input type="radio"/> 2	<input type="radio"/> 2
<input type="radio"/> 3	<input type="radio"/> 3	<input type="radio"/> 3
<input type="radio"/> 4	<input type="radio"/> 4	<input type="radio"/> 4
<input type="radio"/> 5	<input type="radio"/> 5	<input type="radio"/> 5
<input type="radio"/> 6	<input type="radio"/> 6	<input type="radio"/> 6
<input type="radio"/> 7	<input type="radio"/> 7	<input type="radio"/> 7
<input type="radio"/> 8	<input type="radio"/> 8	<input type="radio"/> 8
<input type="radio"/> 9	<input type="radio"/> 9	<input type="radio"/> 9



Your privacy is assured as UNSW Global Pty Limited fully complies with appropriate Australian privacy legislation. Visit www.eaa.unsw.edu.au for more details.



QUESTION	KEY	SOLUTION	STRAND	LEVEL OF DIFFICULTY
1	C	The missing part in C is one third which matches the slice (one third); altogether they complete one whole.	Space and Geometry	Easy
2	A	The sum of x and y adds to 190° which is more than the angle sum of a triangle (180°).	Space and Geometry	Easy
3	D	The total number of vehicles = 135 The angle at the centre for cars = $\frac{90}{135} \times 360^\circ$ $= 240^\circ$	Chance and Data	Medium
4	C	<p>Let D be the diameter of the big wheel (back wheel). Let d be the diameter of the small wheel (front wheel). According to the question information, $D = \frac{3}{2} \times d$.</p> <p>When the car travels 1 m, the big wheel makes 6 turns. Therefore, $6 \times$ the circumference of the big wheel = 1 Circumference of the big wheel is πD, therefore the equation can be presented as: $6 \times \pi D = 1 \dots$ (Equation 1).</p> <p>Let x be the number of turns the small wheel makes when the car travels 1m. Using the same logic, we can form the equation $x \times \pi d = 1 \dots$ (Equation 2)</p> <p>Dividing Equation 1 by Equation 2:</p> $\frac{6D}{xd} = 1$, make x the subject of the equation: $x = \frac{6D}{d}$ <p>Substitute $D = \frac{3}{2} d$</p> $x = \frac{6 \times \frac{3}{2}}{2} = 9 \cdot$	Measurement	Medium

5	89	<p>Height of smallest doll is 40.5mm. Rate of increase in height of successive dolls is $\frac{128}{96}$. Height of doll with 700 dolls inside</p> $= 40.5 \times \left[\frac{128}{96}\right]^{700}$ $= 1.1603 \times 10^{89} \text{ mm}$ <p>Therefore, the value of x is 89.</p>	Number and Arithmetic	Hard
---	----	---	-----------------------	------

Level of difficulty refers to the expected level of difficulty for the question.

Easy more than 70% of candidates will choose the correct option

Medium about 50–70% of candidates will choose the correct option

Medium/Hard about 30–50% of candidates will choose the correct option

Hard less than 30% of candidates will choose the correct option

ACKNOWLEDGMENT

Copyright in this booklet is owned by UNSW Global Pty Limited, unless otherwise indicated. Every effort has been made to trace and acknowledge copyright. UNSW Global Pty Limited apologises for any accidental infringement and welcomes information to redress the situation.

THE FOLLOWING YEAR LEVELS SHOULD SIT THIS PAPER:

Australia	Year 10
Brunei	Form 5
Hong Kong	Form 4
Indian Subcontinent¹	Class 10
Indonesia	Year 11
Malaysia	Form 4
Middle East²	Class 10
New Zealand/Pacific³	Year 11
Singapore	Secondary 3
Southern Africa⁴	Grade 10

1 Indian Subcontinent Region: India, Sri Lanka, Nepal, Bhutan and Bangladesh.

2 Middle East Region: United Arab Emirates, Qatar, Kuwait, Saudi Arabia, Egypt, Bahrain, Oman, Turkey, Lebanon, Tunisia, Morocco, Libya, Algeria and Jordan.

3 Pacific Region: Vanuatu, Papua New Guinea and Fiji.

4 Southern Africa Region: South Africa, Botswana, Lesotho, Swaziland, Zimbabwe and Namibia.



© 2017 UNSW Global Pty Limited. Copyright in this document is owned by UNSW Global Pty Limited.



UNSW Global
AUSTRALIA